



Solve each problem.

Answers

1) Ned was playing basketball with his friend. Ned scored 38 points and his friend scored 23 points. How many points did they score total?

1. \_\_\_\_\_

2) A fast food restaurant sold 10 small hotdogs and 11 large hotdogs. How many hotdogs did they sell total?

2. \_\_\_\_\_

3) At the arcade Cody had won 10 tickets. Later he won 21 more tickets. How many tickets did Cody have total?

3. \_\_\_\_\_

4) In the first half of a trivia game Oliver scored 39 points. In the second half he scored 24 points. How many points did he score total?

4. \_\_\_\_\_

5) Gwen picked up 50 pieces of paper from the floor. If John picked up 30 pieces, how many did they pick up total?

5. \_\_\_\_\_

6) Billy had 40 dollars saved up. After doing some chores his mother gave him another 50 dollars. How much money does he have total?

6. \_\_\_\_\_

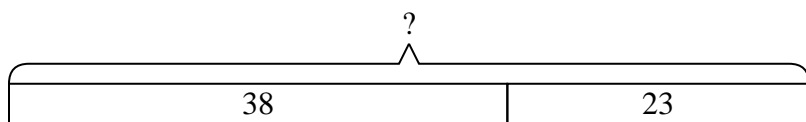
7) An aquarium had 30 fish in it. Later they added 37 fish. How many fish are in the aquarium now?

7. \_\_\_\_\_

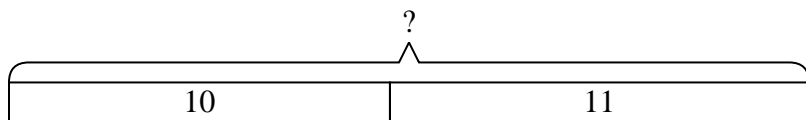


Solve each problem.

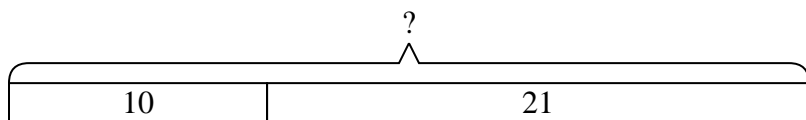
- 1) Ned was playing basketball with his friend. Ned scored 38 points and his friend scored 23 points. How many points did they score total?



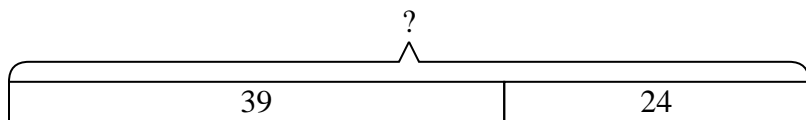
- 2) A fast food restaurant sold 10 small hotdogs and 11 large hotdogs. How many hotdogs did they sell total?



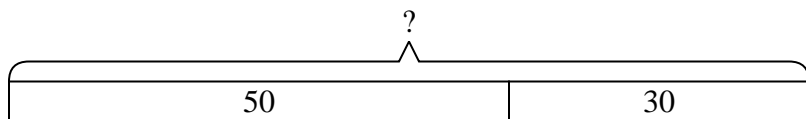
- 3) At the arcade Cody had won 10 tickets. Later he won 21 more tickets. How many tickets did Cody have total?



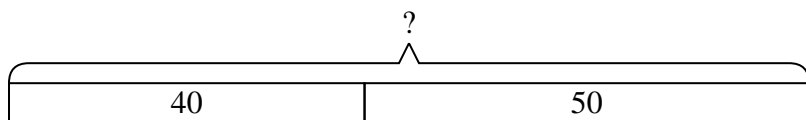
- 4) In the first half of a trivia game Oliver scored 39 points. In the second half he scored 24 points. How many points did he score total?



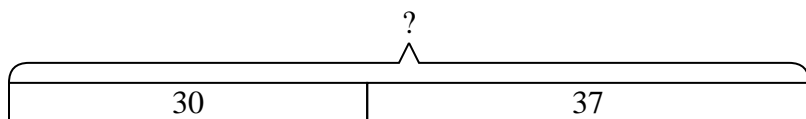
- 5) Gwen picked up 50 pieces of paper from the floor. If John picked up 30 pieces, how many did they pick up total?



- 6) Billy had 40 dollars saved up. After doing some chores his mother gave him another 50 dollars. How much money does he have total?



- 7) An aquarium had 30 fish in it. Later they added 37 fish. How many fish are in the aquarium now?

**Answers**1. **61**2. **21**3. **31**4. **63**5. **80**6. **90**7. **67**